

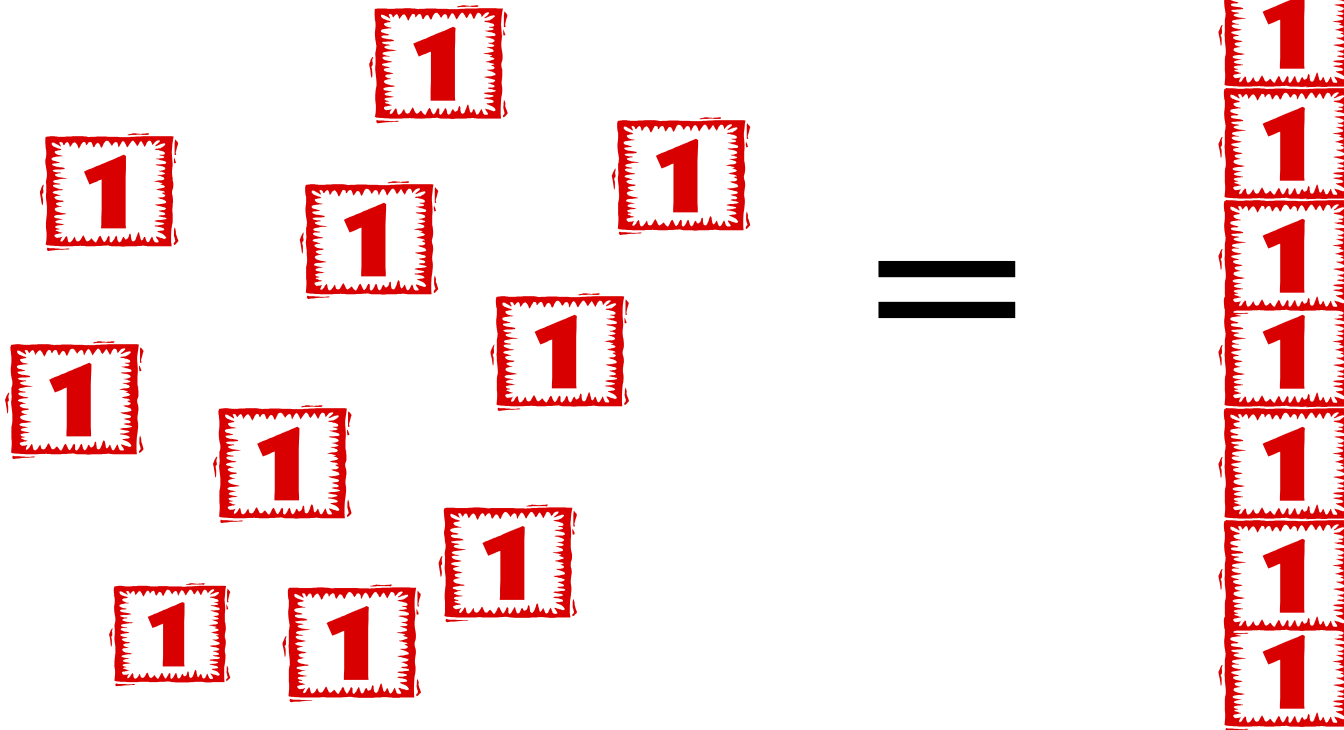


Tens and Ones

Numbers to 50 (fifty)

Rachel Freshour - Talbott Elementary

We have learned to trade 10 ones for 1 ten.




TENS


ONES

1

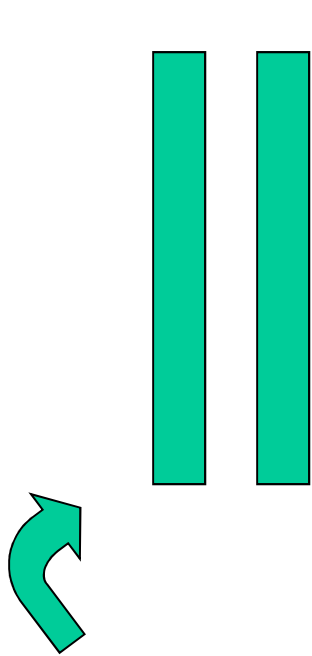
4



This is the tens column. One ten equals 10 ones.




This is the ones column.



Two groups of ten

twenty


20



Three groups
of ten

thirty


30



Four groups of ten

forty

40



How many
groups of ten are
here?

5

fifty

50

**Knowing how
many tens and
ones are in a
number will help
us practice
numbers to 50.**

TENS

ONES

3

6


Knowing this,
we know that
our number is
36.

This tells us that
there are 3 groups
of ten.

This tells us
that there are
6 ones.

TENS

ONES



Knowing
this, we
know that
our number
is 48.

This tells us that
there are 4 groups
of ten.

This tells us
that there are
8 ones.

TENS

ONES



=

35

TENS

ONES



=

21

Pick the correct number:

4 tens 2 ones

24 42

5 tens 1 ones

15 51

1 tens 4 ones

14 41

3 tens 0 ones

30 03



How did you do?

4 tens 2 ones

24

42

5 tens 1 ones

15

51

1 tens 4 ones

14

41

3 tens 0 ones

30

03

